

MT

2018 ___ 1100

Seat No.

--	--	--	--	--	--	--	--

MT - GEOGRAPHY - (73) - SEMI PRELIM - I : PAPER - 4

Time : 2 Hours

(Pages 5)

Max. Marks : 40

Q.1. Fill in the blank choosing the correct alternative : 4

- (a) The growth of urbanisation in India has been
 (a) quick (b) moderate (c) slow (d) rapid
- (b) The forests are found where there is rainfall throughout the year.
 (a) tropical (b) thorny (c) evergreen (d) temperate
- (c) India's Per Capita Income is less than Brazil due to
 (a) low national income (b) massive population
 (c) big family size (d) low foodgrain production
- (d) With respect to area, Brazil stands in the world.
 (a) 3rd (b) 5th (c) 7th (d) 9th

Q.2. Match the correct pairs : 4

- | | |
|-------------------------------|------------------------------|
| (a) Most urbanised state | (i) Bihar, Jammu and Kashmir |
| (b) Low level of urbanisation | (ii) Tamil Nadu and Kerala |
| (c) More urbanization | (iii) Delhi |
| (d) More than 80% urban | (iv) Puducherry |
| | (v) Goa |

Q.3. (A) Name the following : 2

- (a) Crops grown in plantations in India.
 (b) Any two species of birds found in Brazil.

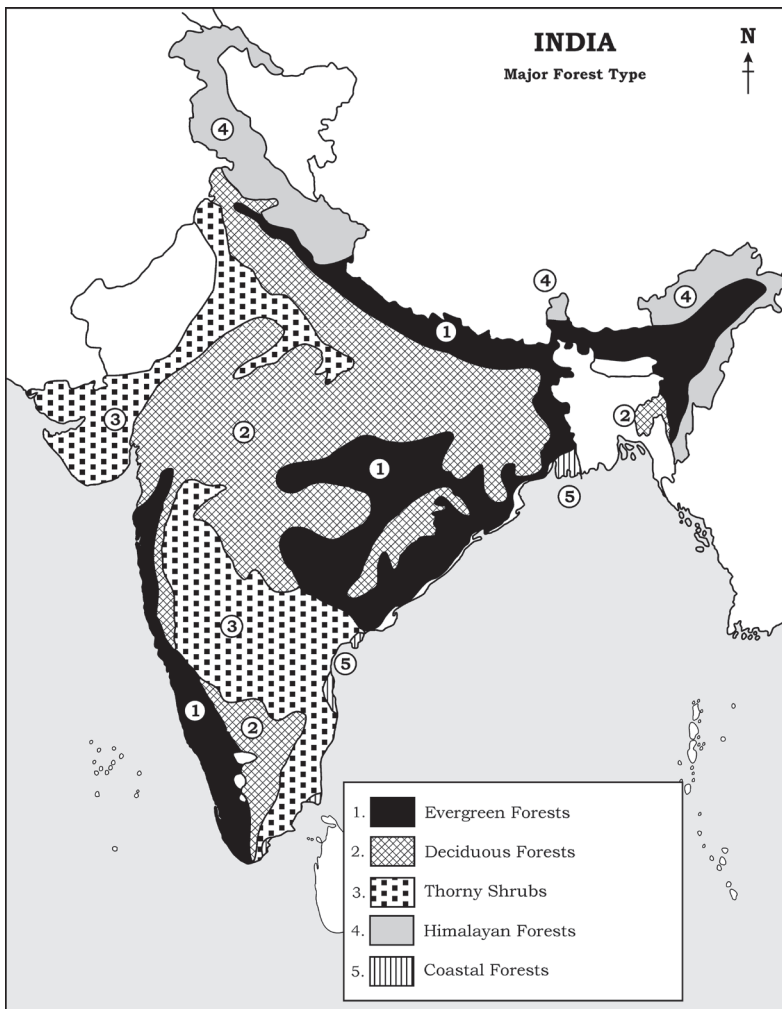
Q.3. (B) State whether the statements are Right or Wrong. Correct the wrong one : 2

- (a) The sex ratio of Brazil has been less than 1000 since centuries.
 (b) The growth of urbanisation in India has been very fast, reaching 86% in 2011.

Q.4. (A) On an outline map of Brazil fill the given information and make a legend : (Any 4) 4

- (a) The cold and warm ocean currents near the Brazilian coast.
- (b) A densely populated region.
- (c) Region of thorny shrubs.
- (d) A coffee producing state.
- (e) A state with very low density of population.
- (f) Tropical grassland area.

Q.4. (B) Read the map of India given and answer the questions given below : (Any 4) 4



- (a) Which forests are found in the snow-capped regions?
- (b) On which coast do you mainly find the coastal vegetation?

- (c) Name the island group showing diverse forest type.
- (d) Where do you find thorny and shrub vegetation in India ? Why ?
- (e) Name the forest found in Assam.
- (f) Which forest is dominant in India ?

Q.5. Give geographical reasons : (Any 3)**6**

- (a) Population is an important resource.
- (b) Except Delhi and Chandigarh, urbanization is low in other parts of India.
- (c) There is mixed economy in Brazil and India.
- (d) Wild life in India is decreasing day by day.

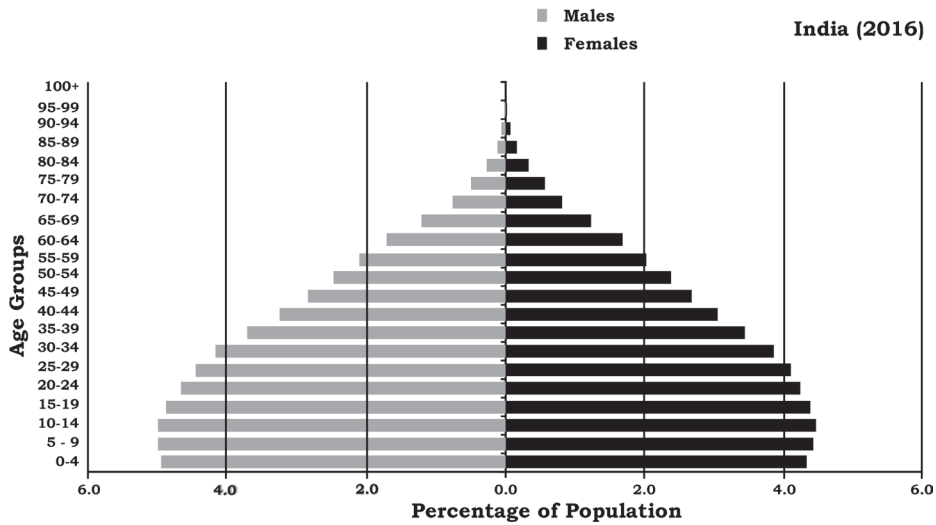
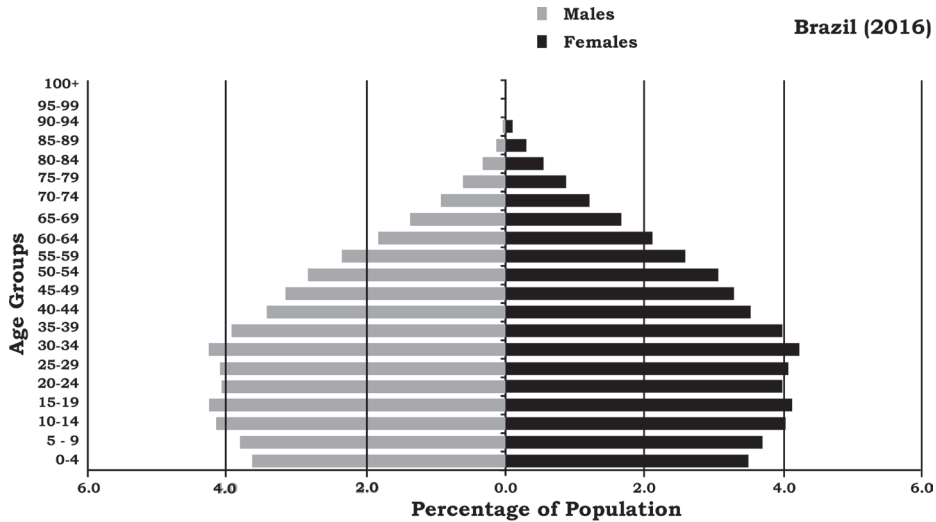
Q.6. (A) Draw a simple bar graph to represent the data and answer the following questions :**6**

Brazil : Gross National Income	
(in billion US \$)	
Years	GNI
1960	20
1980	30
2000	60
2016	180

- (a) What information is depicted in the bar graph ?
- (b) In which year was Brazil's GNI US \$ 30 billion ?
- (c) What is the difference in the GNI of year 2000 and 2016 ?

OR

Q.6. (B) Study the following graph and answer the questions based on it : (Any 3)



- What is this figure called ? What is it also known as ?
- What does the graph depict ?
- In which country is the proportion of children more ? Which country has more proportion of people above 80 years ?
- This country's population is getting slowly older. Which country is being referred to ? Why do we say that ?
- Which country has a higher proportion of youth ? What does this imply ?
- What is the percentage of male population in 0-4 age group in India ? Compare it with the female population.

Q.7. Answer the following in detail : (Any 2)

8

- (a) Giving examples, correlate climate and population distribution
- (b) Why do human settlements grow in specific locations only?
- (c) What are the major causes of degradation of forests in Brazil and in India?
- (d) What are the similarities and differences in the fishing activities of Brazil and India.

Best of Luck 🍀